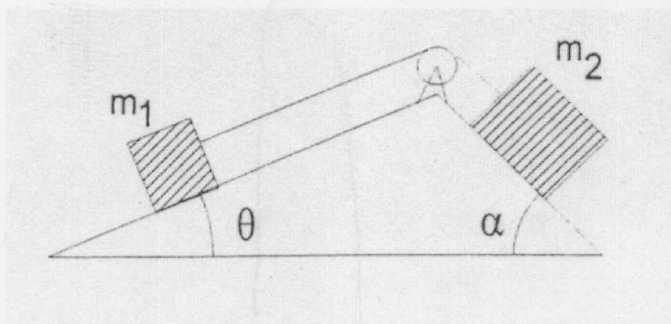


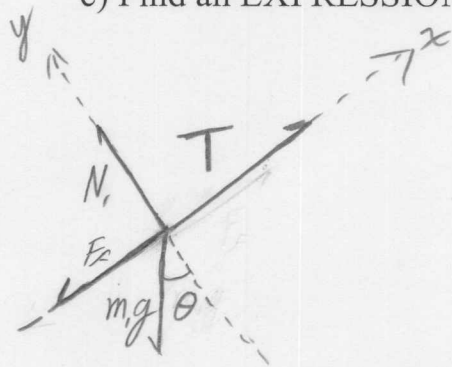
Force Problems

In the figure shown below, find the acceleration of the system. Assume the pulley is massless and frictionless. Use $\Sigma F = ma$ to solve the problem. Draw free body diagrams showing coordinate systems and all of the relevant forces, also, explicitly show basic formulas you are using.

$$\begin{aligned}\theta &= 30^\circ \\ \alpha &= 45^\circ \\ \mu_k &= 0.10 \\ m_1 &= 5.0 \text{ kg} \\ m_2 &= 15.0 \text{ kg}\end{aligned}$$

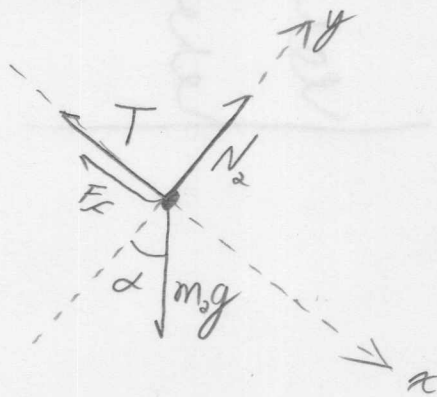


- Draw free body diagrams for EACH mass.
- Write down Newton's Second Law for each mass on each axis.
- Find an EXPRESSION (no numbers) for the acceleration of the system.



$$x: T - m_1 g \sin \theta - \mu_k N_1 = m_1 a$$

$$y: N_1 - m_1 g \cos \theta = 0$$



$$x: m_2 g \sin \alpha - T - \mu_k N_2 = m_2 a$$

$$y: N_2 - m_2 g \cos \alpha = 0$$

$$\textcircled{1} T - m_1 g \sin \theta - \mu_k m_1 g \cos \theta = m_1 a \quad \textcircled{2} m_2 g \sin \alpha - T - \mu_k m_2 g \cos \alpha = m_2 a$$

add $\textcircled{1}$ and $\textcircled{2}$

$$-m_1 g \sin \theta - \mu_k m_1 g \cos \theta + m_2 g \sin \alpha - \mu_k m_2 g \cos \alpha = (m_1 + m_2) a$$

$$a = g \left[\frac{m_2 (\sin \alpha - \mu_k \cos \alpha) - m_1 (\sin \theta + \mu_k \cos \theta)}{m_1 + m_2} \right]$$

$$(m_1 + m_2)$$

$$a = (9.8) \frac{(15)(\sin(45) - 0.1 \cos(45)) - (5)(\sin(30) + 0.1 \cos(30))}{20}$$

$$a = 3.24 \text{ m/s}^2$$