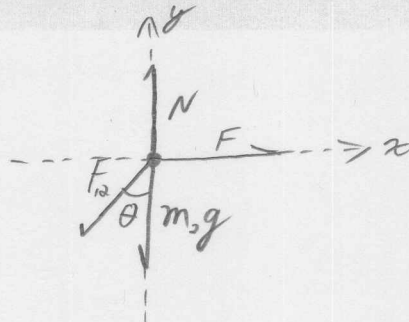
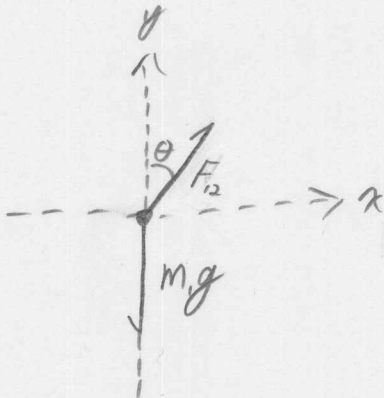
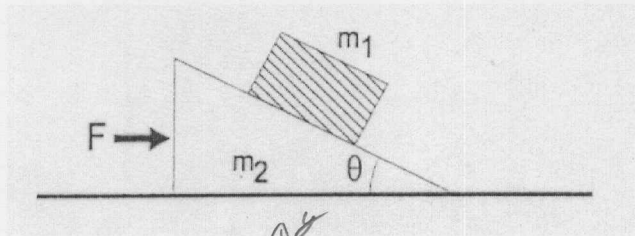


**Test 2**  
**Phys 111, Fall 2009, Section 1**

In the figure shown below all surfaces are frictionless. Find an expression for the force applied to block  $m_2$  so that block  $m_1$  does not slide down the ramp.

$\theta = 30^\circ$   
 $m_1 = 2.0 \text{ kg}$   
 $m_2 = 5.0 \text{ kg}$



$$x: F_{12} \sin \theta = m_1 a \quad (1)$$

$$x: F - F_{12} \sin \theta = m_2 a \quad (2)$$

$$y: F_{12} \cos \theta - m_1 g = 0 \quad (3)$$

$$y: N - F_{12} \cos \theta - m_2 g = 0 \quad (4)$$

Replace  $F_{12} \sin \theta$  in eq (2) with  $m_1 a$  from eq. (1)

$$F - m_1 a = m_2 a$$

$$F = (m_1 + m_2) a$$

Now divide (1) by (3) to eliminate  $F_{12}$  and solve for  $a$ :

$$\frac{F_{12} \sin \theta}{F_{12} \cos \theta} = \frac{m_1 a}{m_1 g} \Rightarrow \tan \theta = \frac{a}{g} \Rightarrow a = g \tan \theta$$

$$F = (m_1 + m_2) g \tan \theta \quad F = (7.0)(9.8) \tan(30) = \boxed{40}$$