

Force Problems – Set 3

1

For each of the following questions, pick the correct response AND explain your reasoning.

A car is driving around a circular track at a constant speed. The net force on the car:

- a) Is zero because the car is not accelerating
- b) Is directed away from the center of the circle
- c) is directed forward, in the direction of the car's travel.
- d) is directed towards the center of the circle.

If the Earth rotated faster on its axis, your weight (as measured by a scale) would:

- a) increase
- b) stay the same
- c) decrease

An airplane is flying in a circle at a constant speed. If the pilot turns so that the radius of the circle gets larger but his speed stays the same, the centripetal force:

- a) stays the same
- b) doubles
- c) quadruples
- d) halves

If the pilot doubles his speed but the radius of the circle stays the same, the centripetal force:

- a) stays the same
- b) doubles
- c) quadruples
- d) halves

Force Problems – Set 3

David is fighting Goliath. To defeat him, David's rock must leave his 0.5 m sling at 20 m/s. Unfortunately, his sling was damaged and the maximum tension the rope can withstand is 500 N. What is the mass of largest rock that David can sling? Ignore gravity.



- Draw a free body diagram of the rock (Ignore Gravity)
- Without writing down Newton's Second Law, write an expression for the acceleration of the rock.

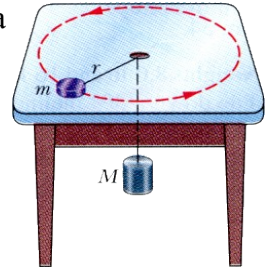
- Write Newton's Second Law for the rock based on your answer to parts a and b. Solve it for the mass of the rock.

- Calculate the mass of the rock.

Force Problems – Set 3

3

A mass m on a frictionless table is attached to a hanging mass M by a cord through a hole in the table. Find the speed with which m must move in order for M to stay at rest.



Force Problems – Set 3

4

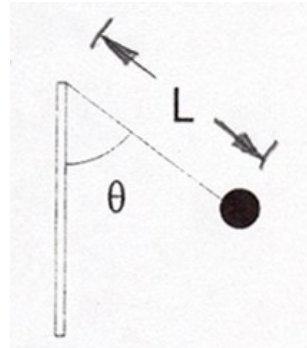
A penny of mass m is placed on a turntable (remember those?) and the turntable begins spinning. The coefficient of static friction between the penny and the turntable is μ_s . What is the fastest angular velocity ω that the turntable can spin before the penny slips.

Force Problems – Set 3

5

Napoleon lands a flippin' sweet blow to the tether ball, which is attached to a rope of whose length is $L = 0.60\text{m}$ sending it whipping around the pole with a period of of 0.75s .

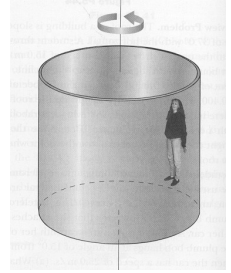
- Napoleon is jealous of your awesome physics skills and needs your help finding an expression for the angle, θ , that the rope makes with the pole.
- Calculate a numeric value for θ using your expression from part a and use it to calculate the tension in the rope.



Force Problems – Set 3

6

The Cyclone is an exciting state fair ride consisting of a large vertical cylinder that spins about its axis. Riders stand inside the cylinder with their backs against the wall. When the cylinder is spinning fast enough, the floor drops away and the rider “sticks” to the wall.



If the coefficient of static friction between a wall and person is μ_s , and the radius of the cylinder is R , show that the maximum period of revolution is given by:

$$P = \left(\frac{4\pi^2 R \mu_s}{g} \right)^{\frac{1}{2}}$$