

SAMPLE TEST 3

PHYS 111 FALL 2012

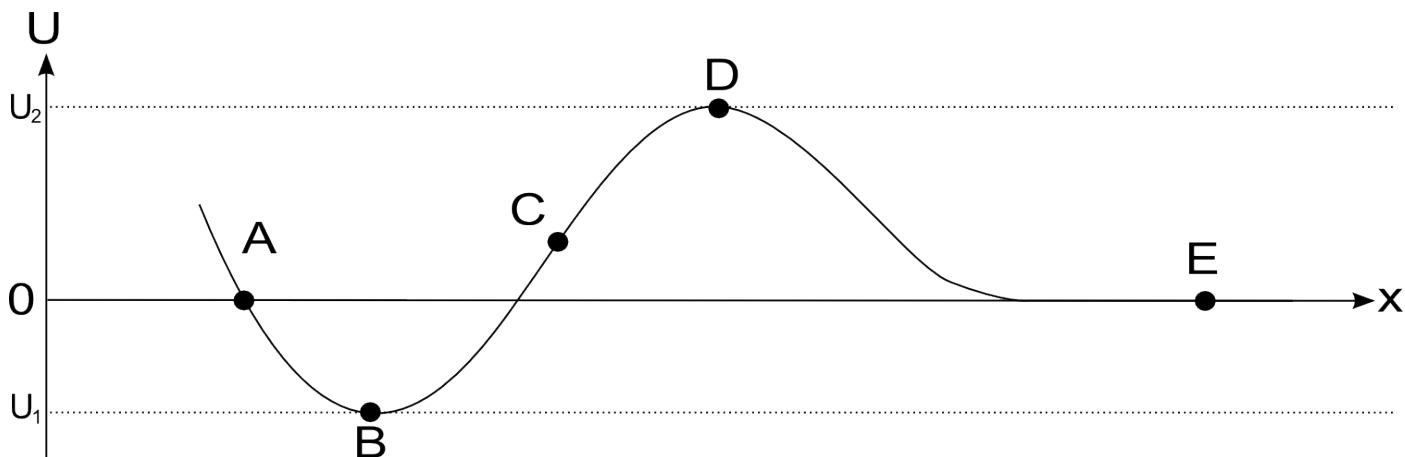
Name: _____

By writing my name above, I affirm that this test represents my work only, without aid from outside sources. In all aspects of this course I perform with honor and integrity.

SHOW YOUR WORK ON ALL OF THE PROBLEMS – YOUR APPROACH TO THE PROBLEM IS AS IMPORTANT AS (IF NOT MORE) IMPORTANT THAN) YOUR FINAL ANSWER.

- 1) Starting with the definition of work, derive the **Work Energy Theorem**.

2) Conceptual Questions, 6 points each.



2.1) Refer to the potential energy curve above. At which point(s) does the Force go to zero?

- a) A, C
- b) B, D
- c) B, D, E
- d) B

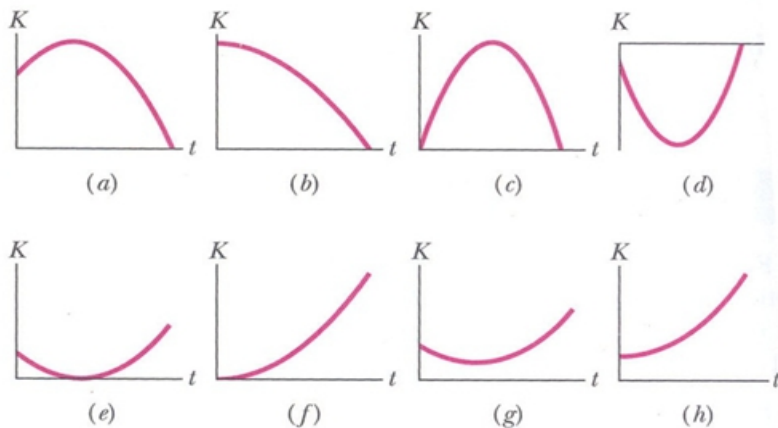
2.2) Your car travels at a *constant velocity* up a hill that makes an angle θ with the horizontal. After traveling a distance d , the **net work** done on the car is:

- a) $\Delta U = mgs \sin \theta$
- b) $\Delta U = mgs \cos \theta$
- c) $\Delta U = 0$
- d) $\Delta U = mgs$

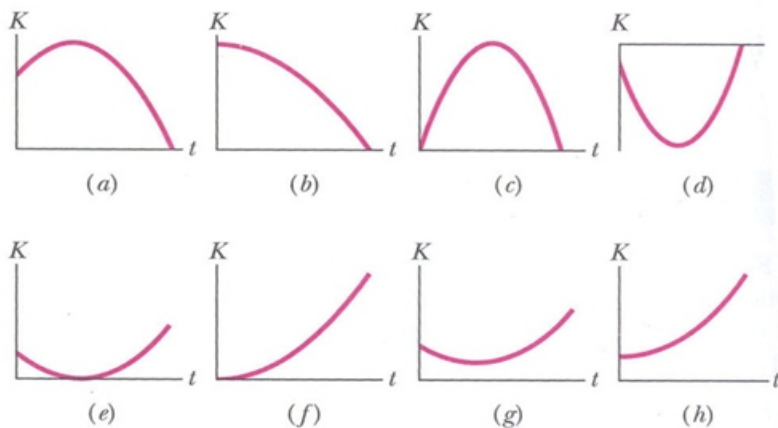
2.3) Two objects, one of mass m and the other of mass $2m$, are dropped from the top of a building. When they hit the ground:

- a) both will have the same kinetic energy.
- b) the heavier one will have twice the kinetic energy of the lighter one.
- c) the heavier one will have half the kinetic energy of the lighter one.
- d) the lighter one will be moving at half the speed of the heavier one.

2.4) A glob of slime is dropped from rest from the edge of a cliff. Which graph(s) below could show how the kinetic energy changes as a function of time?



2.5) A glob of slime is launched with an initial velocity from the top of a cliff. Which graph(s) below could show how the kinetic energy changes as a function of time?
(The direction of the initial velocity is intentionally left undefined.)

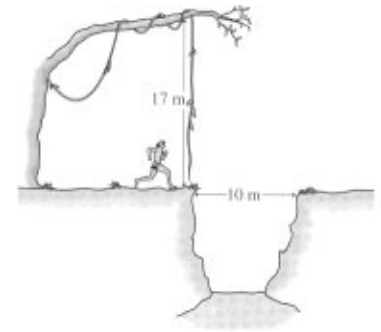


SAMPLE TEST 3

PHYS 111 FALL 2012

Use work-energy techniques to solve the following problem.

Tarzan is late for a date with Jane and is running as fast as he can to meet her. On the way, he has to get over a 10m wide pit of dangerous croc-a-gators. A 17m vine is hanging vertically from a tree at one side of the pit. Tarzan is going to run up, grab the vine, swing across, and drop vertically to the ground on the other side.



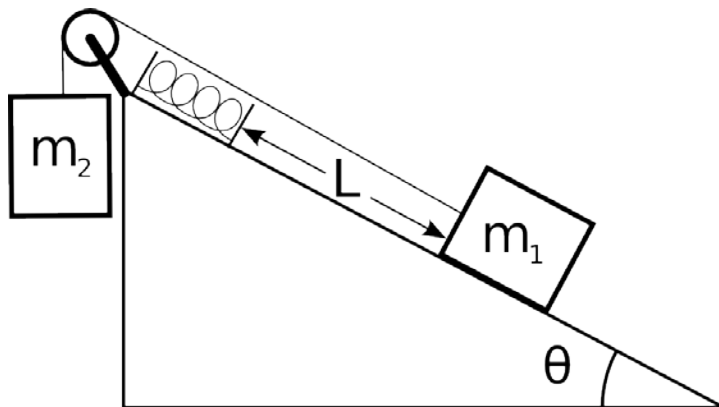
What must his minimum speed be to make it across?

SAMPLE TEST 3

PHYS 111 FALL 2012

3) Two blocks of mass m_1 and m_2 are attached to opposite ends of a rope. The rope passes over a massless frictionless pulley. Mass m_1 is released from rest on a rough ramp with coefficient of friction μ_k at a distance L from a spring with spring constant k .

Find an expression for the maximum compression, d , of the spring in terms of m_1 , m_2 , θ , L , k and g . *IF* your expression is quadratic in d , leave it in standard form (ie don't apply the quadratic formula).



5) (36pts) *Use Work-Energy techniques to solve the following problem*

After getting your physics degree, you end up on the planning committee for the 2040 Olympic games. You are considering a new sport: Asteroid Jumping. You need to pick an asteroid that the high jumpers will not accidentally escape from after their jump (the initial velocity of their jump must be below the escape velocity of the asteroid).

- a) On Earth, the absolute highest a high jumper could go is 3.0m. On the Earth's surface, what initial velocity is required to reach a height of 3.0m?
- b) Asteroids are made out of rock that has a density of 2500 kg/m^3 . Assuming spherical asteroids, find the radius of an asteroid with an escape velocity equal to the velocity from part a.

(HINT: The volume of a sphere is $\frac{4}{3}\pi r^3$, where r is the radius of the sphere.)